




Count the number of quarters (25¢), dimes(10¢), nickels(5¢) and pennies(1¢).

Ex)



Answers

Ex. 4 2 1 2

1)



1. _____

2)



2. _____

3)



3. _____

4)




4. _____

5)



5. _____

6)



6. _____

7)




7. _____

8)



8. _____

9)



9. _____

10)




10. _____



Count the number of quarters (25¢), dimes(10¢), nickels(5¢) and pennies(1¢).

Ex)



Ex.

4 2 1 2

1)



1.

1 1 2 5

2)



2.

2 1 3 3

3)



3.

1 4 1 3

4)



4.

2 1 5 1

5)



5.

2 4 1 2

6)



6.

3 1 4 1

7)



7.

1 2 2 4


8)



8.

2 1 2 4

9)



9.

2 3 1 3

10)



10.

1 2 4 2

Answers